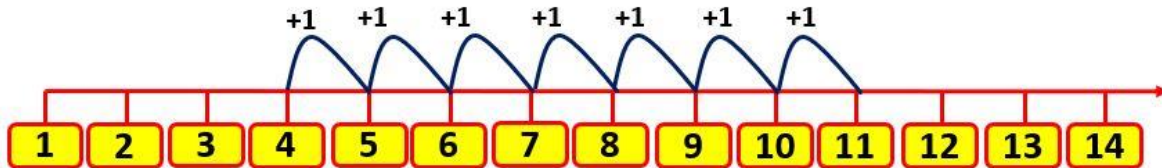


Number Line Addition

Add the Numbers using a Number line?

Q1.

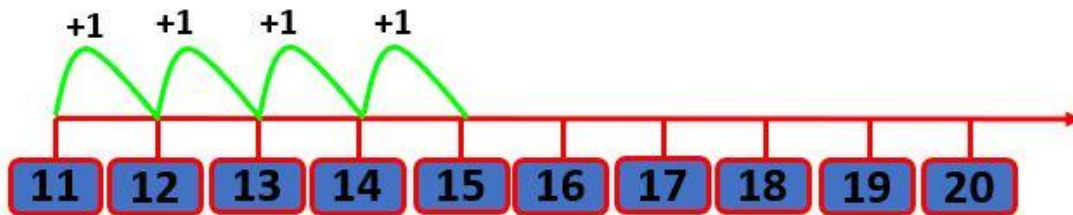


$$\boxed{4} + \boxed{7} = \boxed{?}$$

a) 17

b) 11

Q2.

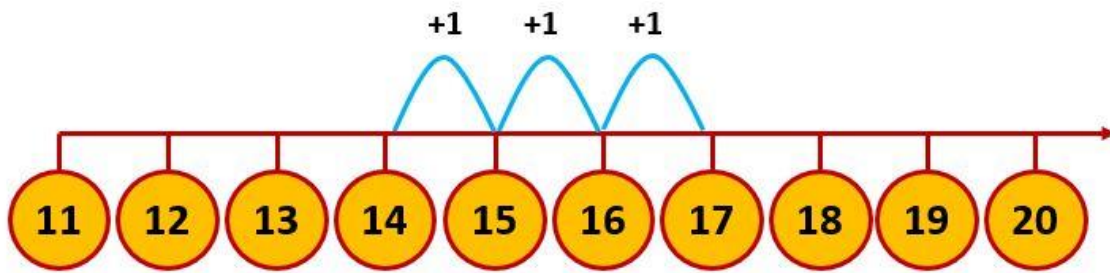


$$\boxed{11} + \boxed{4} = \boxed{?}$$

a) 15

b) 29

Q3.

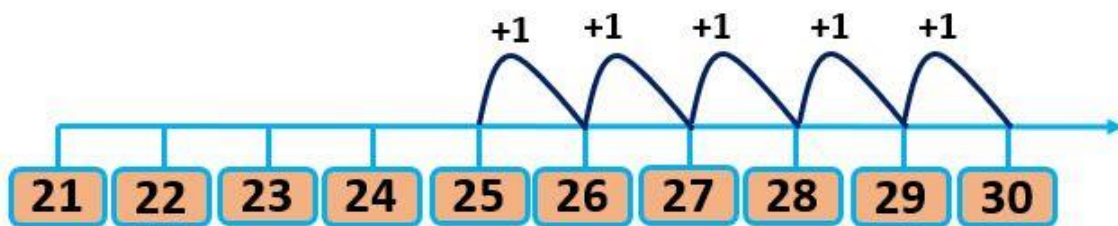


$$\boxed{14} + \boxed{3} = \boxed{?}$$

a) 35

b) 17

Q4.

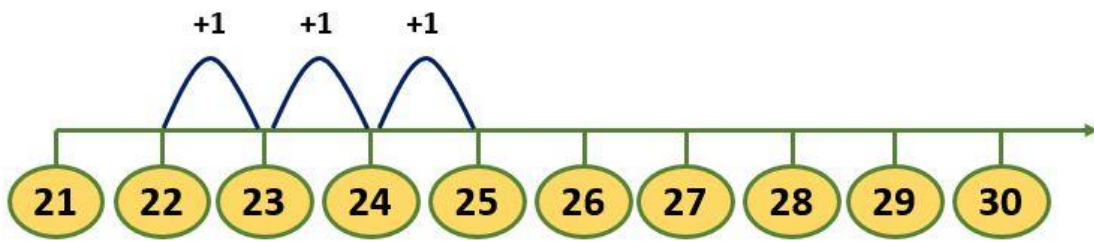


$$\boxed{25} + \boxed{5} = \boxed{?}$$

a) 35

b) 30

Q5.

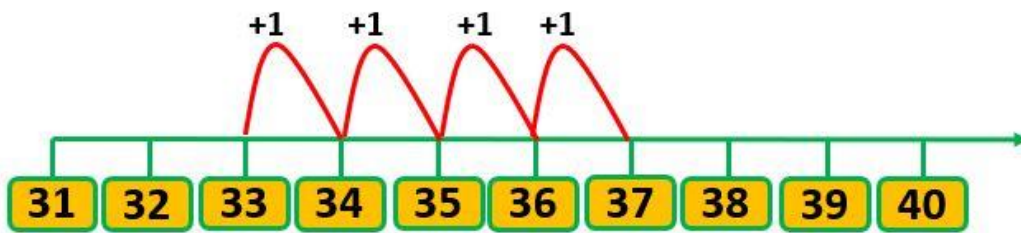


$$\boxed{22} + \boxed{3} = \boxed{?}$$

a) 25

b) 45

Q6.

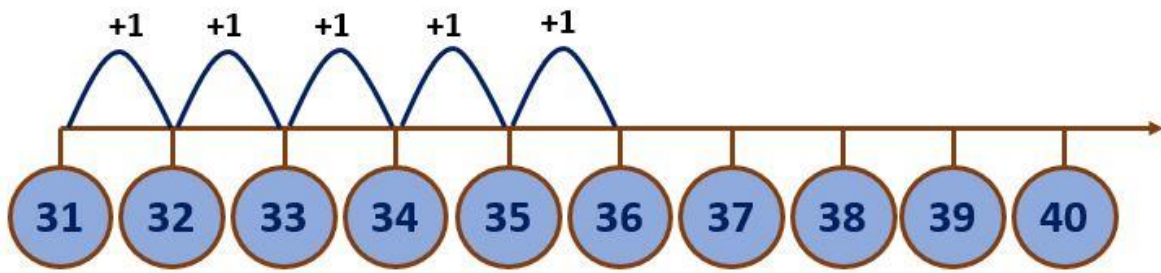


$$\boxed{33} + \boxed{4} = \boxed{?}$$

a) 37

b) 78

Q7.

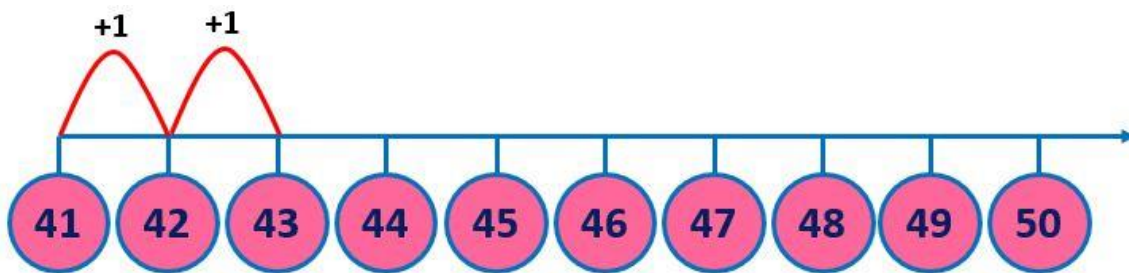


$$\boxed{31} + \boxed{5} = \boxed{?}$$

a) 68

b) 36

Q8.

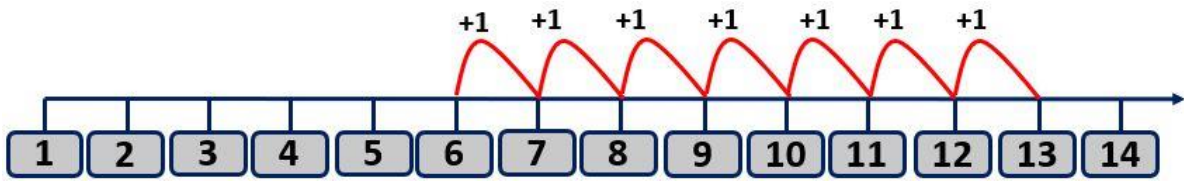


$$\boxed{41} + \boxed{2} = \boxed{?}$$

a) 43

b) 56

Q9.

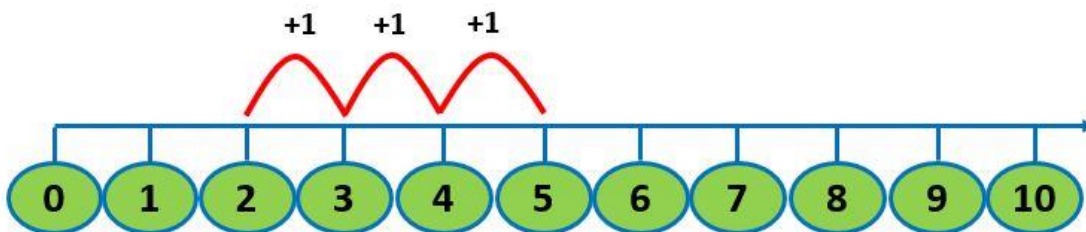


$$\boxed{6} + \boxed{7} = \boxed{?}$$

a) 22

b) 13

Q10.



$$\boxed{2} + \boxed{3} = \boxed{?}$$

a) 5

b) 9

Answers

Q1. a)

Q2. a)

Q3. b)

Q4. b)

Q5. a)

Q6. a)

Q7. b)

Q8. a)

Q9. b)

Q10. a)